



Aakash Kumar



1ST SEM
CHEMISTRY

LUCKY
S P I R A L
NOTEBOOK

for bright future....

OBJECTIVE


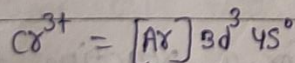
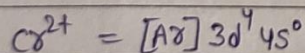
- ① State de Broglie's principle
 → According to de-Broglie's principle e^- and proton particle can exhibit both wave-like and particle-like behavior.

$$\lambda = \frac{h}{p}$$

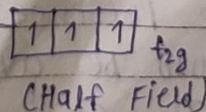

- ② what is an orbital?
 → An orbital is a three dimensional space where the possibility of finding an e^- is maximum.

- ③ Bond order \propto Bond Angle
 " \propto Bond strength
 " \propto %s character
 " \propto Bond stability
 " $\propto \frac{1}{\text{Bond length}}$

- ④ out of Cr^{2+} and Cr^{3+} , which one is stable in aqueous solution.
 → Cr^{3+} is most stable in aqueous solution.



Electronic configuration of Cr^{3+}



⑤ Cu^+ is colourless but Cu^{2+} is coloured. Why?

→ Cu^+ ion has an electronic configuration $3d^{10}$ whereas Cu^{2+} ion has an electronic configuration $3d^9$. Hence an ~~un~~unpaired electron is present in Cu^{2+} .

→ Due to lack of ~~un~~unpaired electrons, Cu^+ is colourless.

⑥ What is selection rule?

→ A restriction in the transition between quantum state of atoms, molecules or metal.

⑦ A gas expands against vacuum. What is the work done on it?

→ No work

In vacuum there is no resistance i.e.

$$P = 0$$

$$W = -P\Delta V$$

$$W = 0$$

⑧ What is the condition for a reaction to be in equilibrium?

→ Rate of Forward ~~reaction~~ ^{Reaction} = Rate of Backward Reaction.

⑨ The presence of CO_2 in boiler feed water should be avoided. Why?

→ CO_2 can make water acidic, which contributes to the pitting of the metal.

⑩ out of NH_3 , PH_3 , AsH_3 and SbH_3 which possesses largest bond angle? Give reason.

→ $\text{NH}_3 > \text{PH}_3 > \text{AsH}_3 > \text{SbH}_3$

As we move top to bottom electronegativity decreases so bond angle decreases.

⑪ Arrange the covalent bonds C-F , C-Br , C-Cl and C-I in increasing order of strength.

→ $\text{C-F} > \text{C-Cl} > \text{C-Br} > \text{C-I}$

⑫ Arrange molecular species N_2 , N_2^+ , N_2^- and N_2^{2-} in increasing order of stability.

→ $\text{N}_2 > \text{N}_2^+ > \text{N}_2^- > \text{N}_2^{2-}$

↓
8.0 3 2.5 2.5 2
↓
one antibonding e^- present

⑬ Name any two coagulants.


→ (i) NaCl

(ii) $\text{Al}_2(\text{SO}_4)_3$

⑭ Under what condition, $\Delta H = \Delta U$?

→ ~~$\Delta U = 0$~~ when the number of moles of the gaseous reactants is equal to the number of moles of the gaseous products.

15) write the ground state electronic configuration of N_2^- ($15e^-$)



16) what is the basic criterion for a nucleus to show NMR spectrum?

-
- (i) we should apply external magnetic field.
 - (ii) Radio waves.
 - (iii) nuclei should have spin quantum $I > 0$

17) what is the significance of free energy?

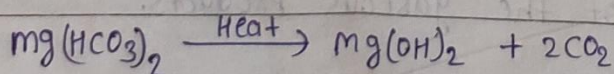
- If the free energy of the system increases the reaction cannot proceed and no work can be done.

18) why is water softened by zeolite process unfit for use in boilers?

- Because this water softening system contains $NaHCO_3$ in the water; when this water is heated, it produces CO_2 which is corrosive for boiler plates.

19) what happens when temporary hard water is boiled? (give equation).

- when we boil water the soluble salts magnesium bicarbonate are converted to insoluble magnesium hydroxide.



20) which of the following is not a nucleophile?

H_2O , BF_3 , NH_3 , OH^-

→ BF_3

Electron donors are nucleophiles. BF_3 is e^- deficient compound.

21) why are $B\delta^+$ and CCl_2 electrophiles?

→ since $B\delta^+$ and CCl_2 wants to gain electron to attain stability.

22) ^{13}C is NMR active, but ^{12}C is not why?

→ ^{13}C is NMR active because it has non-zero nuclear spin while ^{12}C has a nuclear spin equal to zero.

23) what is the direction of a reaction when $\Delta G = 0$?

→ the system is at equilibrium and there is no net change either in forward or backward direction.

24) why is work not a state function?

→ because it is proportional to the distance an object is moved.

$$W = F \cdot \Delta S$$

25) what is critical temperature of a gas?

→ critical temp of a gas is the temperature at or above which vapour of the gas cannot be liquefied.

26) Arrange the following ~~in order~~ ligands in order of increasing field strength

CN^- , CO , H_2O , NH_3 , en , F^- , I^-

~~$\text{CO} > \text{NH}_3 > \text{H}_2\text{O}$~~

→ $\text{CO} > \text{CN}^- > \text{en} > \text{NH}_3 > \text{H}_2\text{O} > \text{F}^- > \text{I}^-$

27) which quantum number specifies the shape of an orbital?

→ angular quantum number (l)

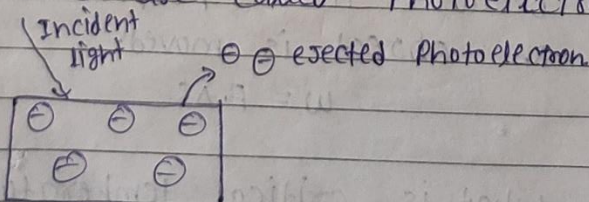
28) what is the designation of the orbital having $n=4$ and $l=3$?

→ $4f$

SUBJECTIVE Atomic and Molecular structure.

1) discuss photoelectric effect and explain equation involved with this effect.

→ It is phenomenon in which electrons are emitted from a material the surface of a metal when light is incident on it. These ejected electrons are called photoelectrons.



$$E = \phi + K \cdot E = hf$$

↓ work function
 ↓ frequency

② How many photons of light having a wavelength of 4000 Å are necessary to provide 1 J of energy?
($h = 6.626 \times 10^{-34} \text{ J-s}$)

$$\lambda = 4000 \text{ \AA} \quad \boxed{1 \text{ \AA} = 10^{-10} \text{ m}}$$

$$\lambda = 4 \times 10^{-7} \text{ m}$$

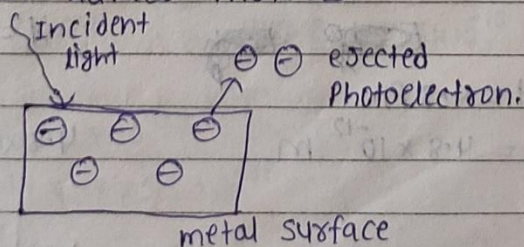
$$\begin{array}{r} 3.313 \\ \times 1.5 \\ \hline 16565 \\ 3313 \\ \hline 49695 \end{array}$$

$$E = \frac{hc}{\lambda} = \frac{6.626 \times 10^{-34} \times 3 \times 10^8}{4 \times 10^{-7}} = 4.9695 \times 10^{-19}$$

$$\text{No. of photons} = \frac{1}{4.9695 \times 10^{-19}}$$

③ Discuss photoelectric effect (with mathematical eqn) for explaining the particle nature of light.

→ The emission of free electron from a metal surface when light is shone on it, is called photoemission or photoelectric effect. This effect led to the conclusion that light is made of packets or quantum of energy. Einstein had already associated the light quantum with momentum. This strongly support the particle nature of light and these particles were named photons.



$$E = \phi + K.E = hf$$

The energy of a photon is ~~given by~~ $E = hf$
momentum $p = \frac{hf}{c}$

④ Wave Particle duality.

→ Wave Particle duality is the concept in quantum mechanics that every particle or quantum entity may be described as either a particle or a wave.

⑤ Heisenberg's uncertainty principle.

→ Heisenberg's uncertainty principle states that it is impossible to determine simultaneously both the position and the momentum of a particle with accuracy

$$\Delta x \cdot \Delta p \geq \frac{h}{4\pi}$$

The above expression is known as Heisenberg's uncertainty ~~principle~~ relation where

Δx = change in position, Δp = change in momentum and h is plank constant.

⑥ calculate the kinetic energy of a moving electron which has a wavelength of 4.8 pm .
(mass of $e^- = 9.11 \times 10^{-31} \text{ kg}$)

→ ~~$\lambda = 4.8 \text{ pm}$~~
 $\lambda = 4.8 \times 10^{-12} \text{ m}$

$$\lambda = \frac{h}{p} = \frac{h}{mv}$$

$$4.8 \times 10^{-12} = \frac{6.626 \times 10^{-34}}{9.11 \times 10^{-31} \times v}$$

$$v = \frac{6.626 \times 10^{-34+31+12}}{4.8 \times 9.11}$$

$$v = \frac{6.626}{43.728} \times 10^9$$

$$\begin{array}{r} 9.11 \\ - 4.8 \\ \hline 72.88 \\ 36.44 \\ \hline 43.728 \end{array}$$

$$v = 0.15 \times 10^9$$

$$v = 15 \times 10^7 \text{ m/s}$$

$$K.E = \frac{1}{2} m v^2$$

$$= \frac{1}{2} \times 9.11 \times 10^{-31} \times (15 \times 10^7)^2$$

$$= \frac{1}{2} \times 9.11 \times 10^{-31} \times 225 \times 10^{14}$$

$$= \frac{2049.75}{2} \times 10^{-17}$$

$$\begin{array}{r} 9.11 \\ \times 225 \\ \hline 4555 \\ 1822 \\ \hline 2049.75 \end{array}$$

$$K.E = 1024.875 \times 10^{-17} \text{ J}$$

⑦ The uncertainties in the position and velocity of a particle are $9.5 \times 10^{-10} \text{ m}$ and $5.5 \times 10^{-20} \text{ ms}^{-1}$, respectively. calculate the mass of the particle. ($h = 6.626 \times 10^{-34} \text{ J-s}$)

→ According to Heisenberg's uncertainty principle.

$$\Delta x \cdot \Delta p = \frac{h}{4\pi}$$

$$\Delta x \cdot m \Delta v = \frac{h}{4\pi}$$

$$\therefore m = \frac{h}{4\pi \Delta x \Delta v} = \frac{6.626 \times 10^{-34}}{4 \times 3.14 \times 9.5 \times 10^{-10} \times 5.5 \times 10^{-20}}$$

$$m = \frac{6.626 \times 10^{-34}}{3.14 \times 38 \times 5.5 \times 10^{-30}}$$

$$m = \frac{6.626}{17.27 \times 38} \times 10^{-4} = \frac{6.626 \times 10^{-4}}{656.26}$$

$$m = \frac{6626}{6562} \times 10^{-6} = 1.0097 \times 10^{-6} = 10.09 \times 10^{-7}$$

$$\begin{array}{r} 3.14 \\ \times 5.5 \\ \hline 1570 \\ 1570 \\ \hline 17.27 \\ \times 38 \\ \hline 13816 \\ 5181 \\ \hline 65626 \end{array}$$

- ⑧ Electromagnetic radiation of wavelength 242 nm is just sufficient to ionize sodium ion. Calculate the ionization energy of sodium atom in KJ/mol ($c = 10^8 \text{ ms}^{-1}$, $h = 6.626 \times 10^{-34} \text{ Js}$).

→ The ionization energy of sodium will be equal to the energy possessed by the radiation of wavelength 242 nm.

$$E = \frac{hc}{\lambda} = \frac{6.626 \times 10^{-34} \times 10^8}{242 \times 10^{-9} \text{ m}}$$

$$= 250.52 \times 10^{-17}$$

$$= 2.5 \times 10^{-19} \text{ J}$$

The ionization energy per mole is

$$= 2.5 \times 10^{-19} \times 6.023 \times 10^{23}$$

$$= 15.05 \times 10^4 \text{ KJ}$$

$$= 150500 \text{ KJ}$$

$$= 150.5 \text{ KJ}$$

- ⑨ If the electron in an unexcited hydrogen atom is excited by absorption of $1.76 \times 10^{-18} \text{ J}$ per atom, what would be the wavelength of radiation emitted when the atom returns to its ground state?

($c = 3 \times 10^8 \text{ ms}^{-1}$, $h = 6.626 \times 10^{-34} \text{ J-s}$)

$$\frac{1}{\lambda} = R \left[\frac{1}{n_1^2} - \frac{1}{n_2^2} \right]$$

$$n_1 = 1$$

$$n_2 =$$

$$R = 1.097 \times 10^7 \text{ m}^{-1}$$

$$E = 1.76 \times 10^{-18} \text{ J}$$

$$E = \frac{hc}{\lambda}$$

When the atom returns to its ground state, it will radiate the same amount of energy it absorbed during the

$$E = hc \Rightarrow \lambda = \frac{hc}{E} = \frac{6.626 \times 10^{-34} \times 3 \times 10^8}{1.76 \times 10^{-18}} = 1.13 \times 10^{-7} \text{ m atom}^{-1} \text{ excitation}$$

$$\lambda = 113 \text{ nm atom}^{-1}$$

(10) Explain dual nature of light and give one example (property/experiment) in favour of its particle nature and wave nature.

→ Light consists of dual nature which means sometimes it behaves like a particle (known as photon), which explains how the light travels in straight lines. Sometimes light behaves as the wave, which explains how light ~~behaves~~ bends around an object.

The dual nature of light is exhibited by:

Photoelectric effect

Refraction and interference

Diffraction and reflection

Diffraction and Photoelectric effect.

The photoelectric effect is an example of light behaving as a particle (photon) whereas the diffraction and interference are examples of light acting as a wave. So it is confirmed now that light is dual nature.

WATER CHEMISTRY

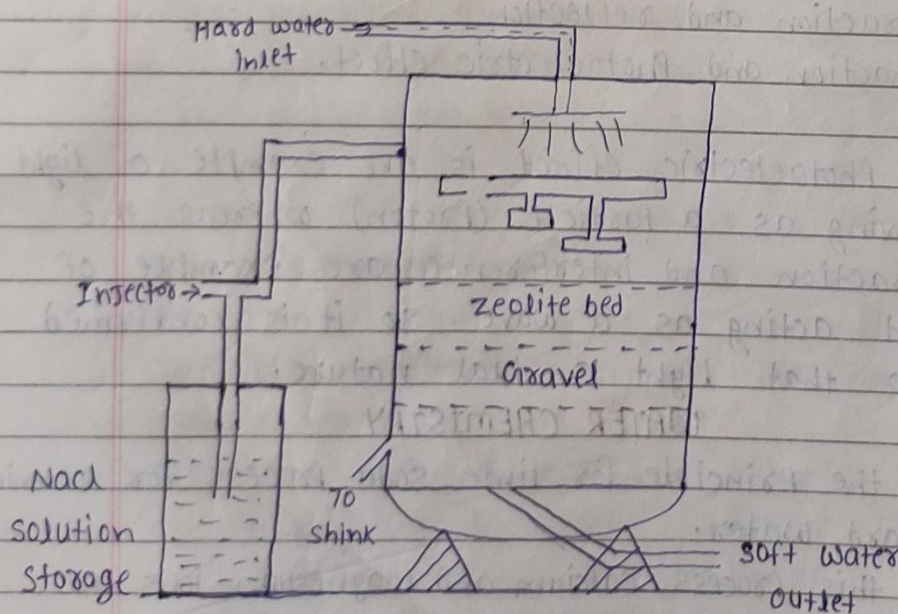
(1) Write the principle for lime soda process for softening of hard water.

→ In this process calcium and magnesium ions are precipitated by the addition of lime Ca(OH)_2 and soda ash (Na_2CO_3).

② Give the theory of zeolite method, its limitations and advantages.

→ The zeolite method is a technique used to soften hard water by removing calcium and magnesium ions and replacing them with sodium ions.

The zeolite method works by passing hard water through a bed of zeolite resin, which is made up of tiny beads that are coated with sodium ions. As the hard water flows through the resin bed, the Ca and Mg ions are attracted to the resin beads and are exchanged with the sodium ions, which are released into the water. This process effectively removes the calcium and magnesium ions from the water,



Advantages of zeolite process.

- ① it removes the hardness almost completely and water of about 10 ppm hardness is produced.
- ② The equipment used is compact, occupying a small space.
- ③ No impurities are precipitated.
- ④ it requires less time for softening.
- ⑤ The process automatically adjusts itself for variation in hardness of incoming water.

Limitation of zeolite process.

- ① This method is not suitable for use in high levels of iron or ~~magn~~ manganese in the water.
 - ② The regeneration process can consume large amount of salt and water, which can be costly.
 - ③ The process of removing calcium and magnesium ions also removes some of the beneficial minerals in water, which may be important for human health.
- ③ A water sample had the following constituents per litre: $\text{CaCO}_3 = 160 \text{ mg}$, $\text{MgHCO}_3 = 150 \text{ mg}$, $\text{CaSO}_4 = 136 \text{ mg}$, $\text{MgSO}_4 = 120 \text{ mg}$, $\text{NaCl} = 10 \text{ mg}$. Calculate the quantity of temporary and permanent hardness in the water sample. Calculate the quantity of lime (78% purity) and soda (92% purity) required for softening of 25 million litre of above water sample.

Note:- CaCO_3 and MgCO_3 impurities are considered as bicarbonate of calcium and magnesium respectively.

Lucky Page

$$\begin{aligned} \text{Temporary hardness} &= \text{mgHCO}_3 + \text{CaCO}_3 \\ &= 150 \text{ mg} + 160 \text{ mg} \\ &= 310 \text{ mg} \end{aligned}$$

$$\begin{aligned} \text{Permanent hardness} &= \text{CaSO}_4 + \text{MgSO}_4 \\ &= 136 \text{ mg} + 120 \text{ mg} \\ &= 256 \text{ mg} \end{aligned}$$

lime requirement.

$$\begin{aligned} \text{CaCO}_3 \downarrow \\ 40+12+48 \\ &= \frac{74}{100} \left[\text{CaCO}_3 + 2 \text{MgHCO}_3 + \text{MgSO}_4 \right] \times \text{vol. of water} \\ &\quad \text{all in terms of CaCO}_3 \text{ eqv.} \end{aligned}$$

$$\begin{aligned} \text{MgHCO}_3 \downarrow \\ 24+1+12+48 \\ &= \frac{74}{100} \left[\frac{160 \times 100}{100} + 2 \times \frac{30}{85} \times \frac{100}{17} + \frac{120 \times 100}{120} \right] \times 25 \times 10^6 \times \frac{1}{100} \times \frac{100}{78} \text{ kg} \end{aligned}$$

$$\begin{aligned} \text{MgSO}_4 \downarrow \\ 24+32+64 \\ &= \frac{74}{78} \left[160 + \frac{6000}{17} + 100 \right] \times 25 \text{ kg} \end{aligned}$$

$$\begin{aligned} \text{CaSO}_4 \downarrow \\ 40+32+64 \\ &= \frac{74}{78} \left[260 + 352.94 \right] \times 25 \text{ kg} \end{aligned}$$

$$= \frac{74}{78} \times 612.94 \times 25 \text{ kg}$$

$$= 14537.67 \text{ kg}$$

soda requirement

$$= \frac{106}{100} \left[\text{CaSO}_4 + \text{MgSO}_4 \right] \times \text{vol. of water}$$

all in terms of CaCO_3 eqv.

$$= \frac{106}{100} \left[\frac{136 \times 100}{136} + \frac{120 \times 100}{120} \right] \times 25 \times 10^6 \times \frac{1}{100} \times \frac{100}{92} \text{ kg}$$

$$= \frac{53}{92} \times 25 \times \frac{100}{4623} \text{ kg} \Rightarrow \frac{53 \times 25 \times 100}{23} = 5760.86 \text{ kg}$$

9) In an experiment to determine the hardness of a sample of water, 50 ml of $N/50$ Na_2CO_3 solution was added to 200 ml of water sample. After complete precipitation of insoluble carbonate, the unreacted Na_2CO_3 was titrated against $N/50$ H_2SO_4 solution, when 20 ml of acid was required. Calculate the hardness and comment on the nature of hardness so determined.

→ milliequivalent of $Na_2CO_3 = 50 \times \frac{1}{50} = 1$

milliequivalent of $H_2SO_4 = 20 \times \frac{1}{50} = \frac{2}{5}$

milliequivalent of Na_2CO_3 absorbed by $H_2O = 1 - \frac{2}{5} = \frac{3}{5}$

meq $CaCO_3 =$ meq Na_2CO_3 absorbed

$w = 53 \times \frac{3}{5} \times 10^{-3}$

$w = 10.6 \times 3 \times 10^{-3} = 31.8 \times 10^{-3}$

$w = 0.0318 \text{ g}$

$w = \frac{0.0318}{200} = \frac{0.0159}{100} = 0.000159 \text{ g}$

$w = 0.159 \text{ kg}$

Hardness = $\frac{0.159}{200} \times 1000 = 0.795 \text{ ppm.}$

③ 20 ml of standard hard water (containing 15g CaCO_3 per litre) required 25 ml of EDTA solution for end point. 100 ml of water sample required 18 ml of EDTA solution, while same water after boiling required 12 ml EDTA solution. Calculate carbonate and non-carbonate hardness of the water sample.

→ 1000 ml of H_2O contains 15g of CaCO_3

$$\begin{array}{ccccccc} 1 & \text{''} & \text{''} & \text{''} & \text{''} & \frac{15}{1000} & \text{''} & \text{''} \\ 100\text{ml} & \text{''} & \text{''} & \text{''} & \text{''} & \frac{15}{1000} \times 100 & \text{''} & \text{''} \end{array}$$

100ml of H_2O contains 1.5g of CaCO_3

1ml of SHW = 1.5mg of CaCO_3

25 ml EDTA required 20 ml of SHW

$$= 20 \times 1.5 \text{ mg of } \text{CaCO}_3$$

1 ml EDTA required = $\frac{20 \times 1.5}{25} = \frac{30}{25}$ mg of CaCO_3

100ml of hard water sample required = 18 ml EDTA solⁿ

$$1 \text{ ml } \text{''} \text{''} \text{''} \text{''} \text{''} = \frac{18}{100} \times \frac{30}{25} \text{ mg of } \text{CaCO}_3$$

$$1000\text{ml } \text{''} \text{''} \text{''} \text{''} \text{''} = \frac{18}{100} \times \frac{30}{25} \times 1000 \text{ mg/L}$$

$$= 18 \times 12 \text{ mg/L}$$

$$= 216 \text{ mg/L}$$

$$\frac{18}{100} \times \frac{30}{25} = \frac{18 \times 30}{100 \times 25} = \frac{540}{2500} = \frac{54}{250} = \frac{27}{125}$$

Determination of Permanent (non-carbonate) hardness.

100ml of solid water sample required 12 ml of EDTA

$$1\text{ml } \text{''} \text{''} \text{''} \text{''} \text{''} = \frac{12}{100} \times \frac{30}{25}$$

$$1000\text{ml } \text{''} \text{''} \text{''} \text{''} \text{''} = \frac{12}{100} \times \frac{30}{25} \times 1000 = 144$$


Total hardness = 216 PPM

Non-carbonate hardness = 144 PPM

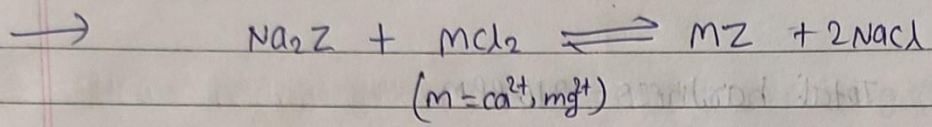
carbonate hardness = Total hardness - Non-carbonate hardness
 $= 216 - 144$
 $= 72 \text{ PPM}$

⑥ Describe the removal of hardness of water by ion-exchange method.

→ ~~Removal of hardness of water of ion by~~ ion-exchange method is used to remove the hardness of water, different ions which is responsible for causing the hardness of water. ion-exchange is of two types namely inorganic ion exchange or organic ion exchange. For example, in order to remove the hardness of ion by inorganic ion exchange hard water is poured ~~into~~ into the tank which has hydrated sodium, aluminium, silicate as an exchanger which reacts with the calcium ion of hard water to form calcium zeolite.



⑦ The hardness of 5000 litres of water sample was removed by passing it through a zeolite softener. The softener then required 200L of NaCl solution containing 125 g/L of NaCl for regeneration. calculate the hardness of the sample of water.



$$\text{Mole of NaCl} = \frac{w}{m} = \frac{125}{58.5}$$

Mole of NaCl = mole of eq. of Permanent hardness

$$M_1V_1 = M_2V_2$$

$$\frac{125}{58.5} \times 2000 = M_2 \times 50000$$

$$M_2 = \frac{1}{58.5 \times 2} = \frac{1}{117.0}$$

$$M_2 = \frac{1}{117} \text{ eq l}^{-1}$$

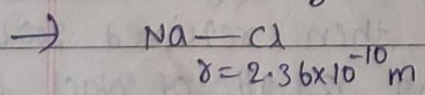
$$= 50 \times \frac{1}{117} \text{ g CaCO}_3 \text{ l}^{-1}$$

$$= 0.42 \text{ PPM}$$

$$\text{hardness} = 0.42 \text{ PPM}$$

Spectroscopic

① The ~~intermole~~ internuclear distance of NaCl is $2.36 \times 10^{-10} \text{ m}$. Calculate the reduced mass and moment of inertia of NaCl. (Atomic mass of Cl = $35 \times 10^{-3} \text{ kg mol}^{-1}$ and Na = $23 \times 10^{-3} \text{ kg mol}^{-1}$)



$$\mu = \frac{m_1 m_2}{m_1 + m_2} = \frac{35 \times 10^{-3} \times 23 \times 10^{-3}}{(35 + 23) \times 10^{-3}} = \frac{805 \times 10^{-6}}{58} = \frac{13.87 \times 10^{-3}}{58}$$

35
x 23

703
703

805

58) 805 (13.8

580

225

130

$$\mu = \frac{13.87 \times 10^{-3} \times 1}{6.023 \times 10^{23}}$$

$$\mu = 2.3 \times 10^{-26}$$

$$I = Mr^2$$

$$I = 2.3 \times 10^{-26} \times 2.36 \times 10^{-10} \times 2.36 \times 10^{-10}$$

$$I = 12.8 \times 10^{-46}$$

$$I = 1.28 \times 10^{-45}$$

② Calculate the force constant for CO, if it absorbs at $2.143 \times 10^5 \text{ m}^{-1}$. (Atomic mass of C = $12 \times 10^{-3} \text{ kg mol}^{-1}$ and O = $16 \times 10^{-3} \text{ kg mol}^{-1}$).

$$\rightarrow \frac{1}{\lambda} \xrightarrow{\text{wave no.}} = 2.143 \times 10^5 \text{ m}^{-1}$$

$$v = \frac{1}{2\pi} \sqrt{\frac{k}{\mu}}$$

$$\frac{1}{\lambda} = \frac{1}{2\pi c} \sqrt{\frac{k}{\mu}}$$

$$\mu = \frac{12 \times 10^{-3} \times 16 \times 10^{-3}}{28 \times 10^{-3}} \times \frac{1}{6.023 \times 10^{23}}$$

$$\mu = \frac{48}{7} \times 10^{-3} \times \frac{1}{6.023 \times 10^{23}} = 6.85 \times 10^{-26}$$

$$\mu = 1.14 \times 10^{-26} \text{ kg}$$

$$2.143 \times 10^5 = \frac{1}{2 \times 3.14 \times 3 \times 10^8} \sqrt{\frac{k}{6.85 \times 10^{-26}}}$$

$$(2.143 \times 10^5)^2 = \left(\frac{1}{2 \times 3.14 \times 3 \times 10^8} \right)^2 \frac{k}{6.85 \times 10^{-26}}$$

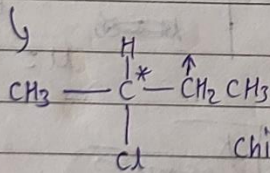
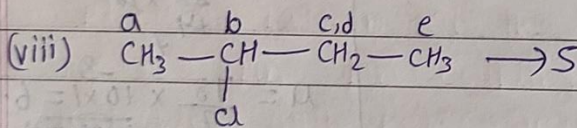
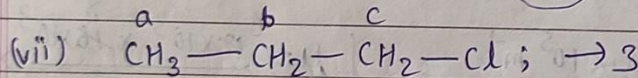


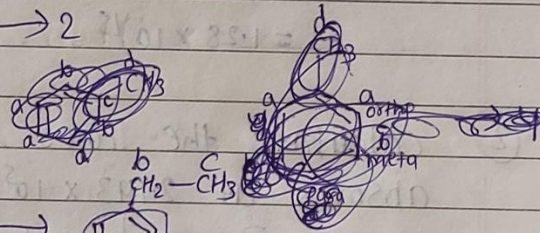
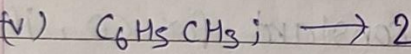
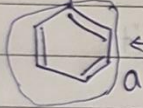
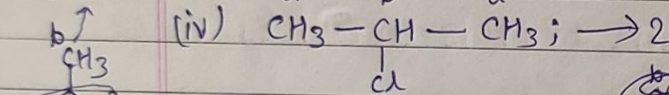
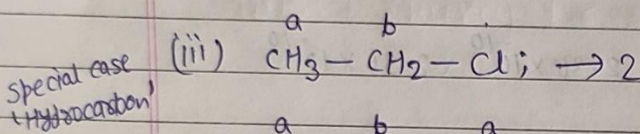
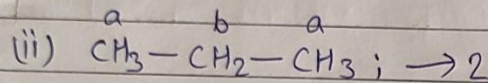
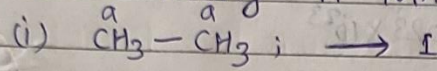
$$K = (2.143)^2 \times 10^{10} \times 4 \times (3.14)^2 \times 9 \times 10^{16} \times 6.85 \times 10^{-23}$$

$$K = 1132.49792 \times (3.14)^2 \times 10^{23}$$

$$K = 11,165.9765 \times 10^{23}$$

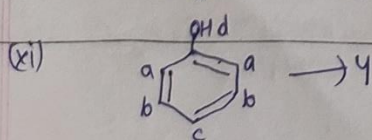
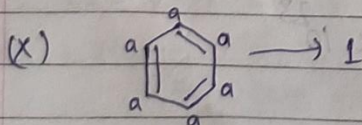
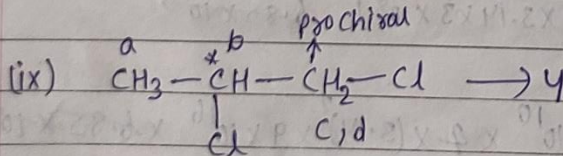
$$K = 1.11659765 \times 10^{19}$$

3) How many ¹H NMR signals are there in-



chiral carbon then adjacent carbon prochiral carbon

Both hydrogen not equivalent.



single H के पास 'H' रहेगा ये signal देगा।

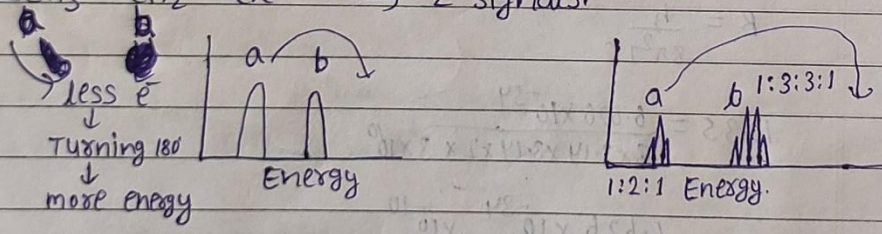

③ At what Frequency shift from TMS, would a group of nuclei with $\delta = 7.50$ resonate in an NMR spectrometer operating at 500 MHz?

→

$$\text{TMS Frequency for 500 MHz} = \frac{500 \text{ MHz} \times 10}{75} = \frac{200}{3} \text{ MHz}$$

$$\begin{aligned} \text{Frequency shift} &= 7.5 \text{ ppm} \times \left(\frac{500 \text{ MHz}}{\frac{200}{3} \text{ MHz}} \right) \\ &= 7.5 \times \frac{500}{200} \times 3 \\ &= \frac{37.5 \times 3}{2} \Rightarrow \frac{112.5}{2} \Rightarrow 56.25 \text{ ppm} \\ &\qquad\qquad\qquad \text{Hz} \end{aligned}$$

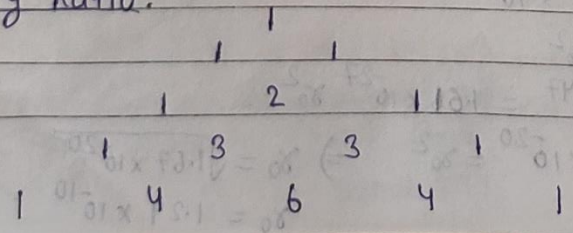
⑥ write the number of $^1\text{H-NMR}$ signals and splitting pattern of the signals (single, double etc) due to spin-spin coupling for the following molecules with proper justification.



Splitting $\rightarrow N + 1$

- For a $\rightarrow N$ is the no. of 'H' on b.
- For b $\rightarrow N$ is the no. of 'H' on a.

Intensity Ratio:



⑦ Use the equation of state of Vander waals to calculate the pressure of 5 moles of $\text{NH}_3(g)$ occupying a volume of 7L at 373K.
[Given $a = 4.17 \text{ L}^2 \text{ atm mol}^{-2}$, $b = 0.0371 \text{ L mol}^{-1}$].
compare the above result with the pressure calculated using ideal gas equation.

→ vander waals eqⁿ

$$\left[P + \frac{an^2}{V^2} \right] [V - nb] = nRT$$

$$\begin{aligned} P &= \frac{nRT}{V - nb} - \frac{an^2}{V^2} \\ &= \frac{5 \times 0.0821 \times 373}{7 - 5 \times 0.0371} - \frac{4.17 (5)^2}{(7)^2} \\ &= \frac{153.1165}{6.8145} - \frac{104.25}{49} \\ &= 22.46 - 2.12 \\ &= 20.34 \text{ atm} \end{aligned}$$

Ideal gas equation

$$V = 7 \text{ L}$$

$$n = 5 \text{ mol}$$

$$T = 373 \text{ K}$$

$$PV = nRT$$

$$P = \frac{nRT}{V} = \frac{5 \times 0.082 \times 373}{7} = \frac{152.93}{7} = 21.84 \text{ atm.}$$

actual pressure = 20.34 atm.

$$\% \text{ deviation} = \frac{|20.34 - 21.84|}{20.34} \times 100$$

$$\Rightarrow \frac{1.5}{20.34} \times 100 \Rightarrow 7.3\%$$

8) The spacing between lines in rotational spectra of HBr is 16.94 cm^{-1} . Calculate the bond length of the molecule ($H=1, Br=80$).

$$2B = 16.94 \text{ cm}^{-1}$$

$$B = 8.47 \text{ cm}^{-1}$$

$$B = \frac{h}{8\pi^2 I C}$$

$$8.47 = \frac{6.626 \times 10^{-34}}{8 \times 3.14 \times 3.14 \times I \times 3 \times 10^{10}}$$

$$I = \frac{6.626 \times 10^{-34}}{24 \times 3.14 \times 3.14 \times 8.47 \times 10^{10}}$$

$$I = \frac{6.626 \times 10^{-34}}{2002 \times 10^{10} \times 10^3}$$

$$I = 3.309 \times 10^{-47}$$

$$I = \mu r_0^2$$

$$3.309 \times 10^{-47} = 0.163 \times 10^{-26} r_0^2$$

$$r_0^2 = \frac{3.309}{0.163} \times 10^{-47+26}$$

$$r_0^2 = \frac{3309}{163} \times 10^{-21}$$

$$r_0^2 = 20.3 \times 10^{-21}$$

$$r_0^2 = 203 \times 10^{-22}$$

$$r_0 = 14.24 \times 10^{-11} \text{ m}$$

$$\mu = \frac{m_1 m_2}{m_1 + m_2}$$

$$\mu = \frac{1 \times 80}{81} \times \frac{1}{6.023 \times 10^{23} \times \frac{1}{10^3} \text{ kg}}$$

$$\mu = \frac{80}{81} \times \frac{1}{6.023} \times 10^{-26} \text{ kg}$$

$$\mu = \frac{80}{487.863} \times 10^{-26} \text{ kg}$$

$$\mu = 0.163 \times 10^{-26} \text{ kg}$$

$$\mu = 1.65 \times 10^{-27} \text{ kg}$$

$$\begin{array}{r} 3.14 \\ \times 3.14 \\ \hline 1256 \\ 314 \\ \hline 942 \\ 00596 \end{array}$$

$$\begin{array}{r} 9.85 \\ \times 8.47 \\ \hline 6895 \\ 3940 \\ \hline 7880 \\ 834295 \end{array}$$

$$\begin{array}{r} 83.42 \\ \times 24 \\ \hline 33368 \\ 16684 \\ \hline 2002.08 \end{array}$$

$$\begin{array}{r} 2002 \overline{) 6626} \quad (3.309) \\ \underline{6006} \\ 6200 \\ \underline{6006} \\ 19400 \\ \underline{18018} \\ 1382 \end{array}$$

- (9) The speed of an electron moving at 600 m s^{-1} is measured to an accuracy of 0.005% . What would be the minimum error in determining its position? (mass of electron $9.1 \times 10^{-31} \text{ kg}$ and Planck constant, $h = 6.6 \times 10^{-34} \text{ kg m}^2 \text{ s}^{-1}$.)

→ Heisenberg's uncertainty principle.

$$\Delta x \cdot \Delta p \geq \frac{h}{4\pi}$$

$$\Delta x \cdot m \Delta v \geq \frac{h}{4\pi}$$

$$\Delta x \geq \frac{h}{4\pi m \Delta v} \quad \text{--- (1)}$$

here

$$\Delta v = 0.005\% \text{ of } 600 \text{ m s}^{-1} = \frac{600 \times 0.005}{100} = 0.03 \text{ m/s}$$

$$\Delta x \geq \frac{6.6 \times 10^{-34}}{4 \times 3.14 \times 9.1 \times 10^{-31} \times 0.03}$$

$$\Delta x \geq 1.9248 \times 10^{-3} \text{ m}$$

- (10) Discuss the failures of classical mechanics to explain properties of particles at atomic and sub-atomic level.

→ classical or Newtonian mechanics cannot explain such phenomena as ~~black~~ ~~explain~~ ~~such~~ ~~phenomena~~ as black body radiation, the photoelectric effect, or the dependence of the heat capacity of a substance on temperature, quantum mechanical tunneling and the Raman effect. cannot be explained by classical mechanics.

(11) What is an absorption spectrum? Discuss about $\pi-\pi^*$ and $n-\pi^*$ transitions giving Examples.

→ An absorption spectrum occurs when light passes through a cold, dilute gas and atoms in the gas absorb at characteristic frequencies.

$\pi-\pi^*$ transitions occur when an electron in a π molecular orbital is excited to a higher energy π^* orbital.

$n-\pi^*$ transitions occur when an electron in a non-bonding orbit is excited to a higher energy π^* orbital.

(12) With reference to NMR spectroscopy, discuss chemical shift, shielding and deshielding of protons and spin-spin interaction.

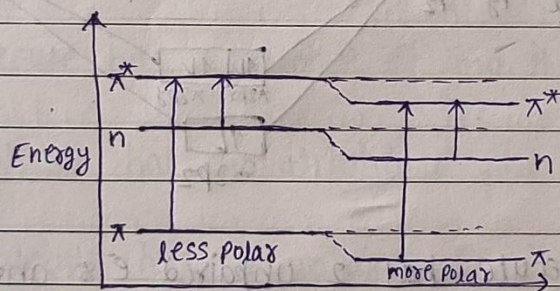
→ Chemical shift:- The separation of signals position of signal of nucleus of particular type of Hydrogen from reference standard (T.M.S) is called chemical shift.

Shielding:- In NMR, when the electron density is high around the nucleus, the opposing magnetic field to electron is also ~~higher~~ ^{higher} which in turn gives huge shielding.

Deshielding:- Deshielding is when electron density falls around the nucleus, the magnetic field opposing it reduces. then the nucleus feels more of the external magnetic field.

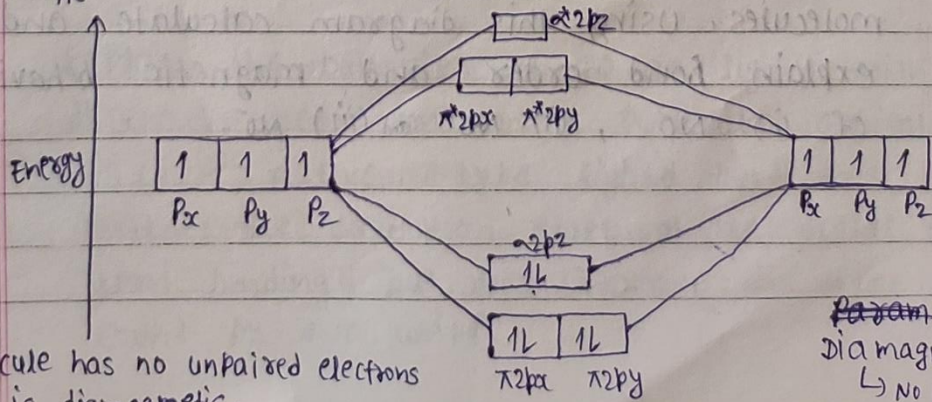
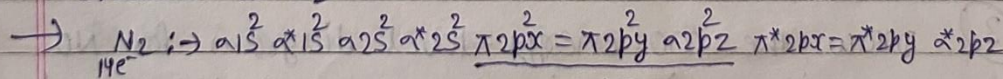
③ Explain the effect of solvent on $n \rightarrow \pi^*$ and $\pi \rightarrow \pi^*$ electronic transition.

→ As the Polarity of solvent increases the $\pi \rightarrow \pi^*$ transition to a lower energy whereas the polarity of solvent increases the $n \rightarrow \pi^*$ transition goes to a higher energy.



M.O.T

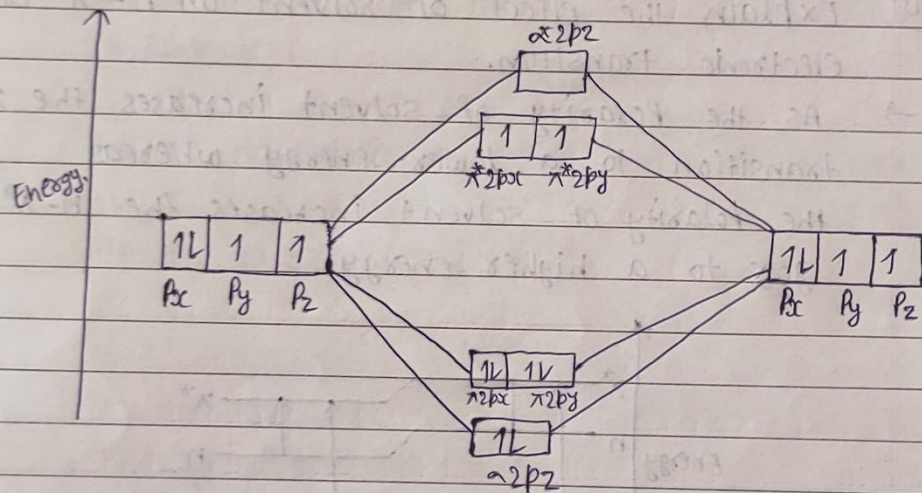
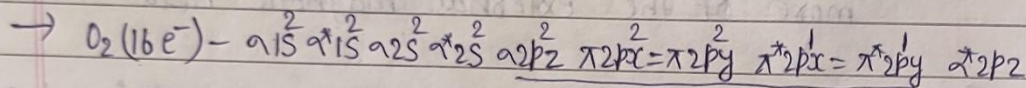
① Draw the mo energy-level diagram for N_2 and based on the diagram, explain the magnetic property observed in N_2 .



→ N_2 molecule has no unpaired electrons and is diamagnetic.

~~Param~~
Diamagnetic
↳ No unpaired e^-

② Draw the MO diagram energy-level diagram for O_2 and based on the diagram, and explain the magnetic property observed in O_2 , O_2^+ and O_2^-

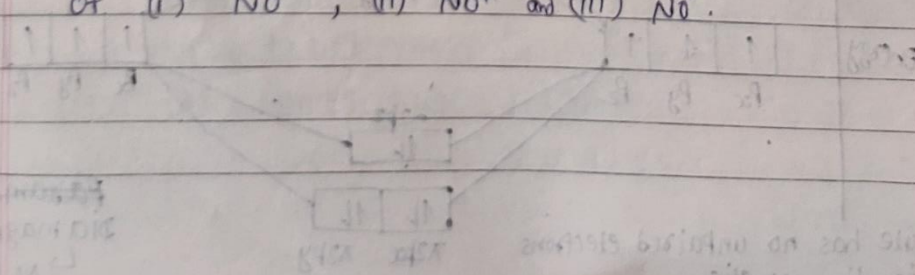


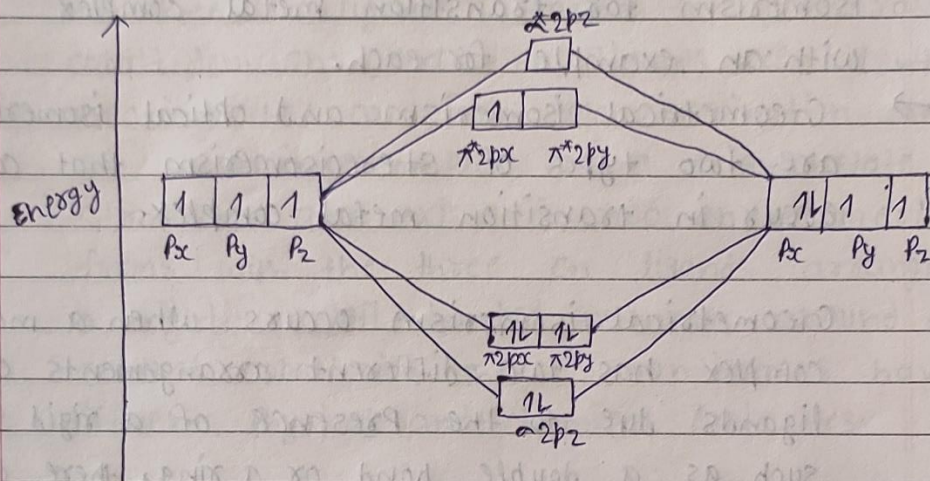
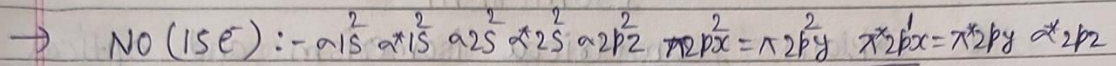
O_2 molecule has 2 unpaired e^- 's and it is Paramagnetic.

O_2^+ molecule has 1 unpaired e^- and it is Paramagnetic.

O_2^- molecule has 1 unpaired e^- and it is Paramagnetic.

③ Draw the MO energy-level diagram for NO molecules. Using this diagram calculate and explain bond order and magnetic behavior of (i) NO, (ii) NO^+ and (iii) NO^- .





NO molecule has 1 unpaired e⁻ and it is Paramagnetic.

NO⁺ molecule has no unpaired e⁻ and it is Diamagnetic.

NO⁻ molecule has 2 unpaired e⁻ and it is Paramagnetic.

$$\text{Bond order of NO} = \frac{10 - 5}{2} = \frac{5}{2} = 2.5$$

$$\text{Bond order of NO}^+ = \frac{10 - 4}{2} = 3$$

$$\text{Bond order of NO}^- = \frac{10 - 6}{2} = 2$$

④ Explain the behavior of CO as ligand with different metal ions using molecular orbital theory.

→ CO is a dative, L-type ligand that does not effect the oxidation state of the metal centre upon binding, but does increase the total electron count by two units.

Isomerism

① Explain geometrical isomerism and optical isomerism for transition metal complex with an example for each.

→ Geometrical isomerism and optical isomerism are two types of stereoisomerism that can occur in transition metal complex.

Geometrical isomerism occurs when a metal complex has two different arrangements of ligands due to the presence of a rigid structure, such as a double bond or a ring, there are two possible arrangements exist: cis and trans.

For Example, consider the complex $[\text{Co}(\text{NH}_3)_4\text{Cl}_2]^+$ which has two chloride ions and four ammonia ligands around a central cobalt ion. The cis-isomer has the two chloride ions on adjacent corners of the square plane and the four ammonia ligands on the other two corners, while the trans-isomer has the two chloride ions on opposite corners and the four ammonia ligands on the other two corners. These isomers have different physical and chemical properties.

Optical isomerism occurs when a metal complex has a non-superimposable mirror image, called an enantiomer. In transition metal complexes, optical isomerism is often seen in octahedral complexes.

For example, consider the complex $[\text{Co}(\text{en})_3]^{3+}$ which has three en ligands attached to a central cobalt ion. The three en ligands are bidentate, meaning they can form two coordination bonds each. The resulting complex has a tris-chelate structure and exists in two enantiomeric forms, with the three en ligands arranged in a right- or left-handed manner around the central cobalt ion. These enantiomers have different physical and chemical properties.

② Explain ionization isomerism and linkage isomerism for transition metal complex with an example for each.

➤ Heisenberg's Uncertainty Principle

The dual nature of the electron implies that any precise measurement of its position would create uncertainty in measurement and position. The Heisenberg uncertainty principle states that

•

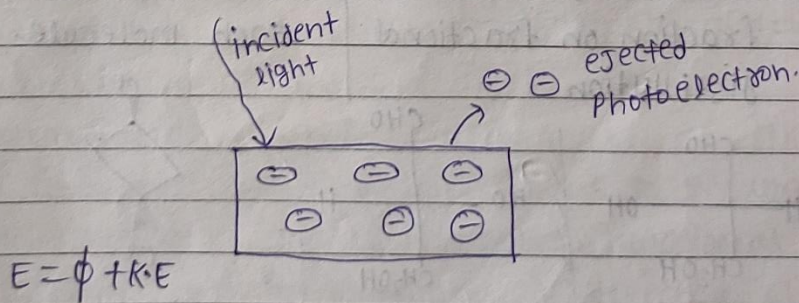
It is impossible to determine simultaneously both the position and the momentum of a particle with accuracy.

$$\Delta x \cdot \Delta p \geq \frac{h}{4\pi}$$

The above expression is known as uncertainty relation where Δx = change in position, Δp = change in momentum and h = Planck's constant.

➤ Photoelectric effect.

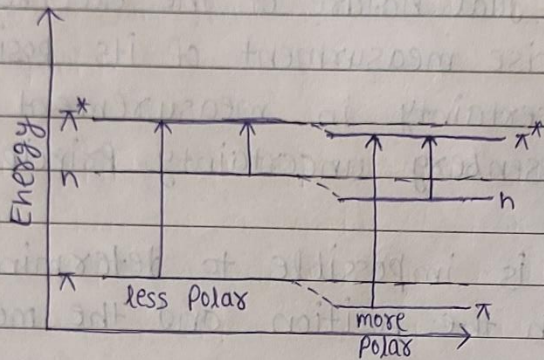
It is a phenomenon in which electrons are ejected from the surface of a metal when light is incident on it. These ejected electrons are called photoelectrons.



➤ Explain the effect of solvent on $n \rightarrow \pi^*$ and $\pi \rightarrow \pi^*$ electronic transition.

Soln: As the polarity of solvent increases, the $\pi \rightarrow \pi^*$ transition to a lower energy whereas

the $n \rightarrow \pi^*$ transition goes to a higher energy.



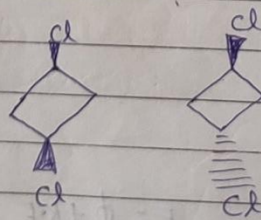
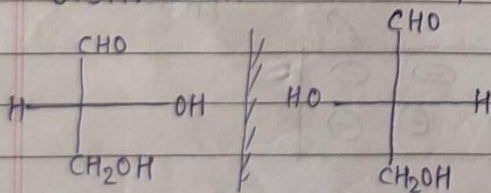
➤ Difference between enantiomers and diastereomers.

Enantiomers

- They are mirror image of each other
- have identical physical properties
- Present in pair
- similar molecular shape
- always give one fraction on fractional distillation

Diastereomers

- They are not mirror images of each other.
- have distinct physical properties.
- can be several molecules.
- Different molecular shape.
- give separate fraction for each molecule.



➤ Difference between S_N1 and S_N2

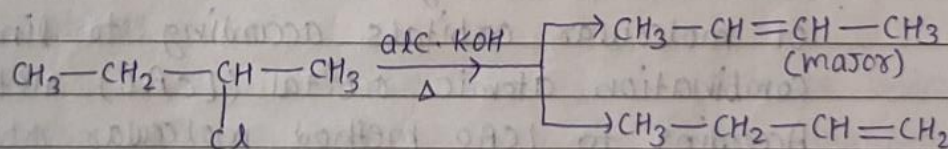
S_N1	S_N2
<ul style="list-style-type: none"> • This is a two step reaction • formation of carbocation • Rate of reaction depends only on the concentration of organic reactant • No inversion in the final product 	<ul style="list-style-type: none"> • This is a one step reaction • No formation of carbocation • Rate of reaction depends on both the concentration of the reactant and reagent. • There is optical inversion in product.

➤ Explain the following terms.

(i) Saytzeff Rule with example.

It states that in dehydrohalogenation reactions, the preferred product is that alkene which has a greater number of alkyl groups attached to the doubly bonded carbon atoms.

example



(ii) functional group region

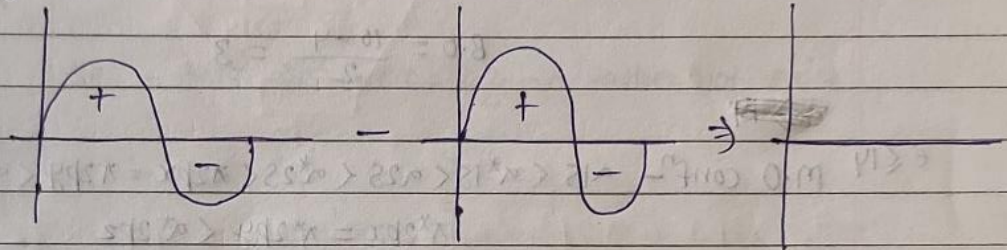
The functional group region is 2.5 to 7.4 μm ($4000 - 1430 \text{ cm}^{-1}$). In this region, functional groups of organic compound is detected.

(iii) Fingerprint region

The fingerprint region is 7-11 μm ($1430 - 910 \text{ cm}^{-1}$) gives a good deal of information about the molecule

Thus m.o. form by the addition of atomic orbitals is called bonding molecular orbital which has more charge density, less energy, and so as more stability than constituent atomic orbitals.

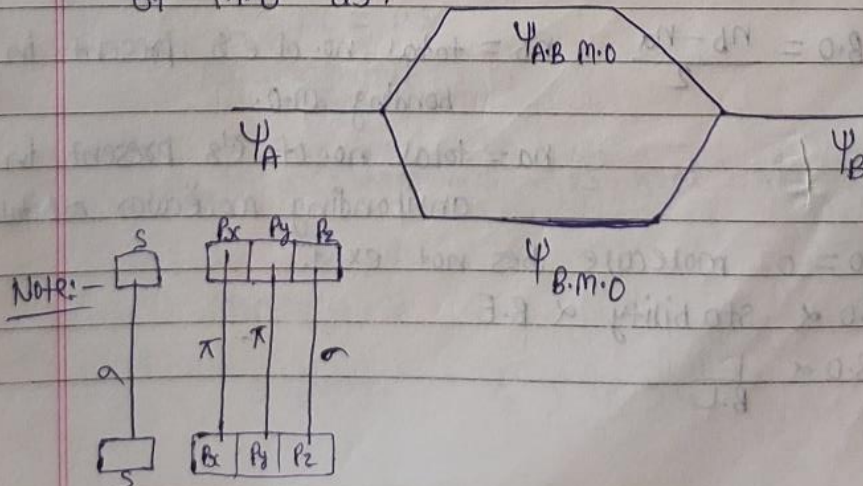
(ii) by the subtraction of atomic orbitals.



$$\psi_A - \psi_B \Rightarrow \psi_{\text{Anti bonding molecular orbital}}$$

Thus m.o. forms by the subtraction of atomic orbital is called anti bonding molecular orbital which has less charge density, more energy and so as less stability than constituent atomic orbitals.

that is the number of atomic orbitals under goes LCAO method to give the same number of m.o. as.



m.o configuration upto N_2 ($14e^-$)

N - 1s	2s	2p _x	2p _y	2p _z
α	α	π	π	α
N - 1s	2s	2p _x	2p _y	2p _z

$$14e^- \rightarrow \overset{2}{\sigma}1s \overset{2}{\sigma^*}1s \overset{2}{\sigma}2s \overset{2}{\sigma^*}2s \overset{2}{\pi}2p_x = \overset{2}{\pi}2p_y \overset{2}{\sigma}2p_z$$

$$B.O = \frac{10 - 4}{2} = 3$$

~~_____~~

$e^- \leq 14$ m.o confⁿ - $\sigma 1s < \sigma^* 1s < \sigma 2s < \sigma^* 2s < \pi 2p_x = \pi 2p_y < \sigma 2p_z < \pi^* 2p_x = \pi^* 2p_y < \sigma^* 2p_z$

m.o configuration onward N_2 ($> 14e^-$)

m.o confⁿ - $\sigma 1s < \sigma^* 1s < \sigma 2s < \sigma^* 2s < \sigma 2p_z < \pi 2p_x = \pi 2p_y < \pi^* 2p_x = \pi^* 2p_y < \sigma^* 2p_z$

Bond order: - It is half of the difference between electrons Presenting Bonding molecular orbital and Anti Bonding molecular orbitals.

$$B.O = \frac{n_b - n_a}{2}$$

n_b = total no. of e^- 's present in bonding m.o.

n_a = total no. of e^- 's present in antibonding molecular orbitals.

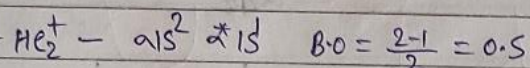
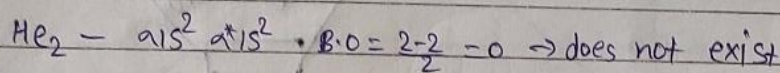
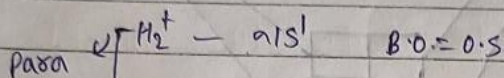

(i) $B.O = 0$ molecule does not exist.

(ii) $B.O \propto$ stability \propto B.E

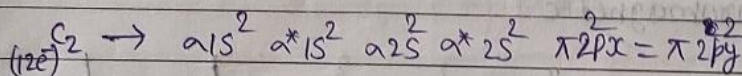
(iii) $B.O \propto \frac{1}{B.L}$

(iv) B.O's are same then ^{less} ~~greater~~ the no. of ~~antibonding~~ bonding e⁻s. more stable will be ~~at~~ the molecule.

Ex:-




Stability: - $H_2^+ > He_2^+$
stable



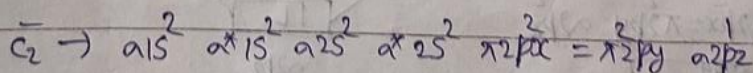
B.O. = 2

Diamagnetic



B.O. = 1.5

Paramagnetic



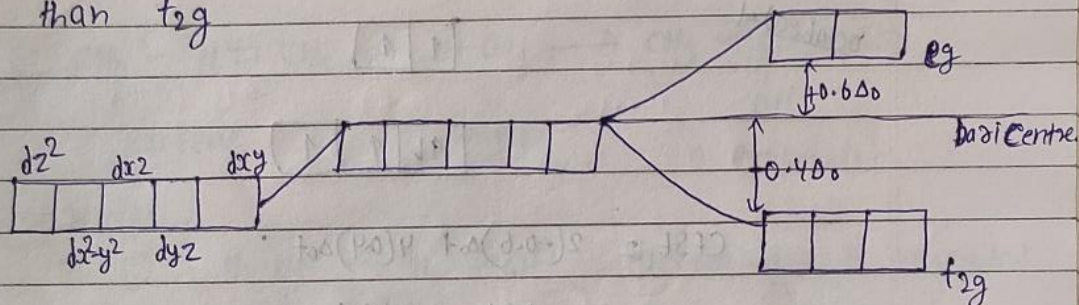
B.O. = 2.5

Paramagnetic

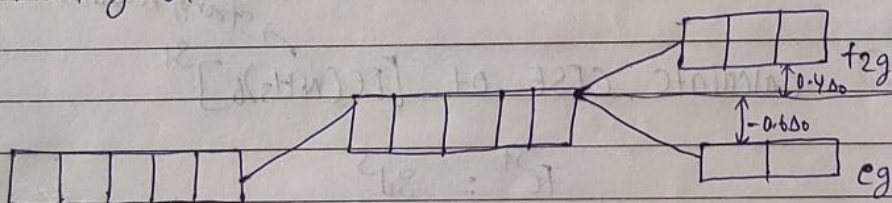
Stability: - $C_2^- > C_2 > C_2^+$

CFT

- ① splitting of d-orbital in ~~an~~ octahedral field.
 → due to octahedral approach of ligands eg lobes face direct repulsion of o while lobes of t_{2g} face less repulsion (at 45°) so eg energy more than t_{2g}



- ② splitting of d-orbital in tetrahedral field.



repulsion face by t_{2g} orbitals is greater at $35^\circ 16'$ than that in eeg orbital at $54^\circ 44'$

- ① $\Delta_o > P.E \Rightarrow$ low spin complex
 ② $\Delta_o < P.E \Rightarrow$ high spin complex


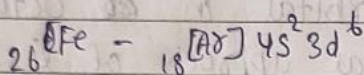
The amount of energy required to pair an intercoming electron is called pairing energy.

$$CFSE = n_{t_{2g}}(-0.4\Delta_o) + n_{eg}(0.6\Delta_o)$$



→ no. of pair e⁻s.

$$= (-0.4n_{t_{2g}} + 0.6n_{eg})\Delta_o + n P.E \text{ (P.E is used in case of low spin complex).}$$

① calculate CFSE of $[\text{Fe}(\text{H}_2\text{O})_6]^{2+}$ → weak ligands



CFSE

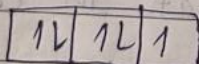




$$\text{CFSE} = 2(-0.6)\Delta_0 + 4(0.4)\Delta_0$$

$$= -1.2\Delta_0 + 1.6\Delta_0$$

$$= +0.4\Delta_0$$

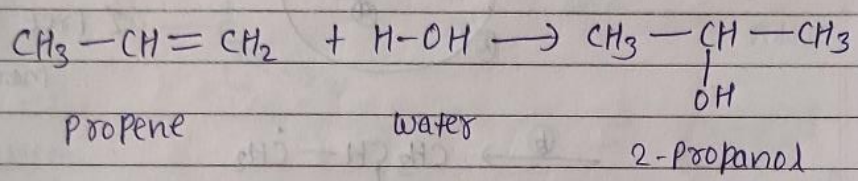
② calculate CFSE of $[\text{Fe}(\text{NH}_3)_6]^{3+}$ → strong ligands



$$\text{CFSE} = (-0.4)5\Delta_0 + 2PE$$

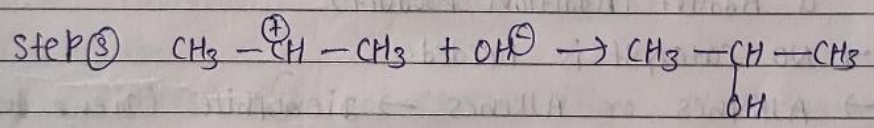
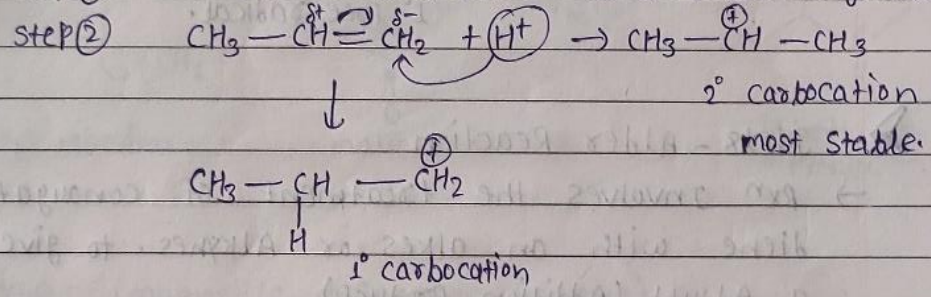
$$= -2\Delta_0 + 2PE$$

➤ **Markonikoff's Rule -**
According to this rule in addition reaction of alkene, +ve part of reactant attack on carbon having more no. of hydrogen and -ve part attack on carbon having less hydrogen.

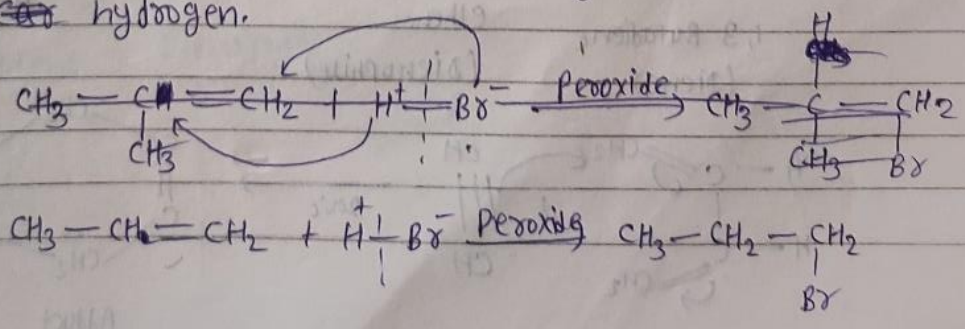


Mechanism




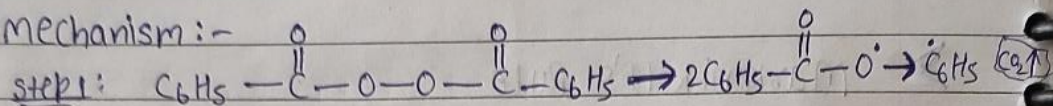
step ① $\text{H} - \text{OH} \rightarrow \text{H}^+ + \text{OH}^-$ electrophile is generated.



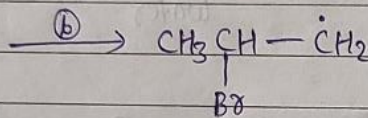
➤ **Antimarkonikoff's Rule -**
→ In the presence of Peroxide in addition rxn of unsymmetrical alkene, +ve part attack on that carbon having less no. of hydrogen and -ve part attack on that carbon having more no. of hydrogen.



Mechanism:-



2° Free radical
more stable.



1° Free radical.

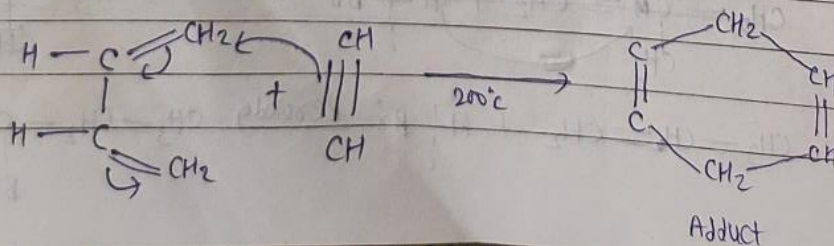
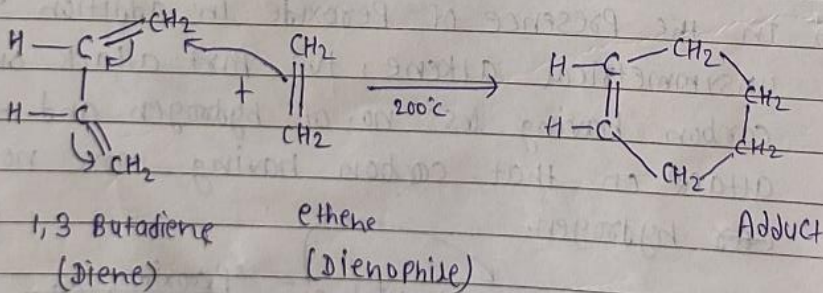
➤ Diels-Alder Reaction

→ Rxn Involves the treatment of conjugated diene with an alkene or Alkynes. to give a Adduct (Addition product)

→ NO catalyst is needed.

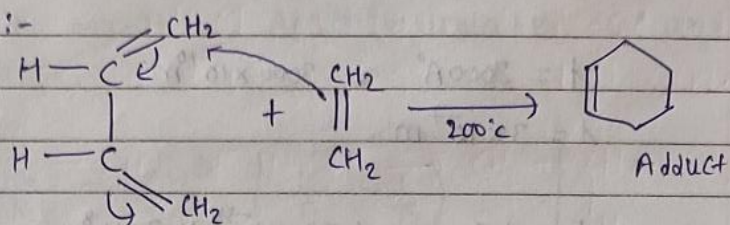
→ Alkynes or Alkenes → dienophile (Diene loving)

→ The product of Diels-Alder is Adduct.

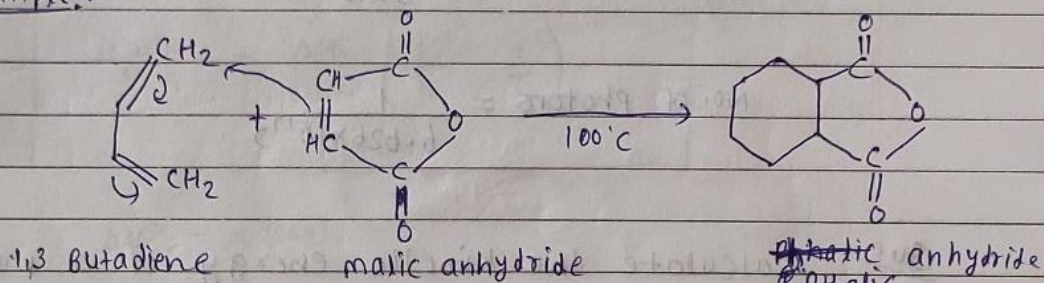


The net result is formation of two new σ bonds and one π bond. & breaking of 3 π bonds (original)

Mechanism:-



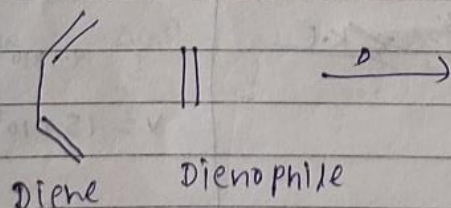
Example:-



→ M.R.I (Magnetic Resonance imaging)

Diels-Alder reaction

→ It is (4+2) type of cycloaddition rxn taking place in presence of heat simplest example in the cycloaddition of 1,3-butadiene & ethene.



Ques The equilibrium constants for the reaction $H_2(g) + S(s) \rightleftharpoons H_2S(g)$ are 18.5 at 925K and 9.25 at 1000K. Calculate standard enthalpy of the reaction. Also calculate ΔG° and ΔS° at 925K.

$$\log \frac{K_2}{K_1} = \frac{\Delta H^\circ}{2.303R} \left(\frac{1}{T_1} - \frac{1}{T_2} \right)$$

$$\log \frac{P_2}{P_1} = \frac{\Delta H_v}{2.303R} \left(\frac{1}{T_1} - \frac{1}{T_2} \right)$$

$\Delta H^\circ = x$ (say)

$\Delta G^\circ = \Delta H^\circ - T \Delta S^\circ$

?

$$\Delta G^\circ = -2.303RT \log K_{eq}$$

8.314

$\Delta G^\circ = y$ (say)

$$\Delta G^\circ = \Delta H^\circ - T \Delta S^\circ$$

\downarrow \downarrow \downarrow \downarrow
 y x 925 ?

13/5/19, 19/21
2-May

WATER



Date _____
Page _____

$DL \cdot DP > \frac{h}{9x}$

- | | |
|-------------------|----------------------|
| (1) $Ca(HCO_3)_2$ | } Temporary hardness |
| (2) $Mg(HCO_3)_2$ | |
| (3) $CaSO_4$ | } permanent hardness |
| (4) $MgSO_4$ | |
| (5) $CaCl_2$ | |
| (6) $MgCl_2$ | |

Lime requirement for softening (in mg/L)

$$= \frac{74}{100} \left[\text{Temp. } Ca^{2+} + 2 \times \text{Temp. } Mg^{2+} + P_{perm}(Mg^{2+} + Fe^{2+} + Al^{+3}) \right]$$

+ $CO_2 + H^+(HCl \text{ or } H_2SO_4) + HCO_3^- - NaAlO_2$
all in terms of $CaCO_3$ equivalents

Soda requirement for softening (in mg/L)

$$= \frac{106}{100} \left[P_{perm} \cdot (Ca^{2+} + Mg^{2+} + Al^{+3} + Fe^{2+}) + H^+(HCl \text{ or } H_2SO_4) \right]$$

- HCO_3^- all in terms of $CaCO_3$ equivalents

2018

7(a) calculate the quantity of lime and soda required for softening 50000 lit. of water containing the following.
 $Ca(HCO_3)_2 = 8.1 \text{ ppm}$, $Mg(HCO_3)_2 = 7.5 \text{ ppm}$, $CaSO_4 = 13.6 \text{ ppm}$,
 $MgSO_4 = 12 \text{ ppm}$, $MgCl_2 = 2 \text{ ppm}$, $NaCl = 4.7 \text{ ppm}$.

Soln

Constituent	multiplication factor	$CaCO_3$ equivalent.
$Ca(HCO_3)_2 = 8.1 \text{ ppm}$	$\frac{100}{162}$	$8.1 \times \frac{100}{162} = 5$
$Mg(HCO_3)_2 = 7.5 \text{ ppm}$	$100/146$	$7.5 \times \frac{100}{146} = 5.1$
$CaSO_4 = 13.6 \text{ ppm}$	$100/136$	$13.6 \times \frac{100}{136} = 10$
$MgSO_4 = 12 \text{ ppm}$	$100/120$	$12 \times \frac{100}{120} = 10$
$MgCl_2 = 2 \text{ ppm}$	$100/95$	$2 \times \frac{100}{95} = 2.1$

40 + 122 = 162
24 + 122 = 146
40 + 32 + 64 = 136
24 + 32 + 64 = 120
24 + 71 = 95

¹H N.M.R Spectroscopy

(Nuclear magnetic Resonance.)

N.M.R active & inactive nuclei

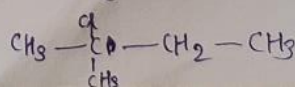
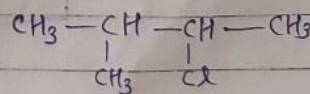
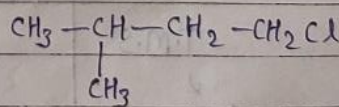
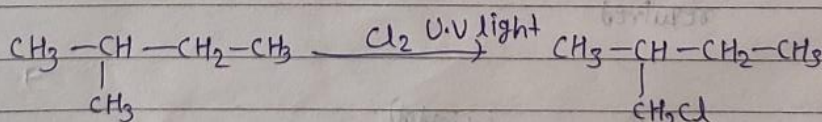
Proton	Neutron	Spin quantum no.
even	even	$I = 0$ N.M.R inactive
odd	odd	$I = \text{integer}$
odd	even	} $I = \text{fraction.}$
even	odd	

$$I = \frac{1}{2} \quad (\text{For } 1H)$$

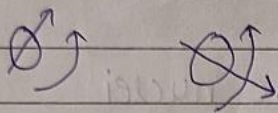
$$\begin{aligned} \text{No. of oxidation} &= 2I + 1 \\ &= 2 \times \frac{1}{2} + 1 \\ &= 2 \end{aligned}$$

Ques Prediction of NO. of signal in ¹H N.M.R.

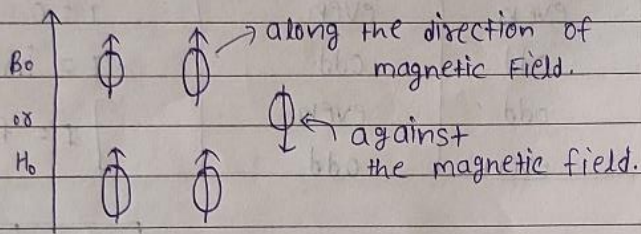
- 1 type of H → ① $\overset{\text{H}}{\text{C}}_3 - \overset{\text{H}}{\text{C}}_3 \rightarrow 1$
- 2 type of H → ② $\text{C}_3 - \text{C}_2 - \text{C}_3 \rightarrow 2$
- 2 type of H → ③ $\text{C}_3 \text{C}_2\text{Cl} \rightarrow 2$
- 3 type of H → ④ $\text{C}_3 \text{C}(\text{O}) \text{C}_2 \text{C}_3 \rightarrow 3$



In the absence of magnetic field.

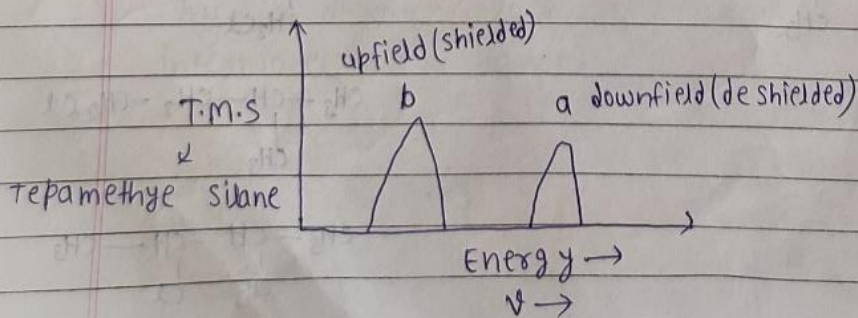
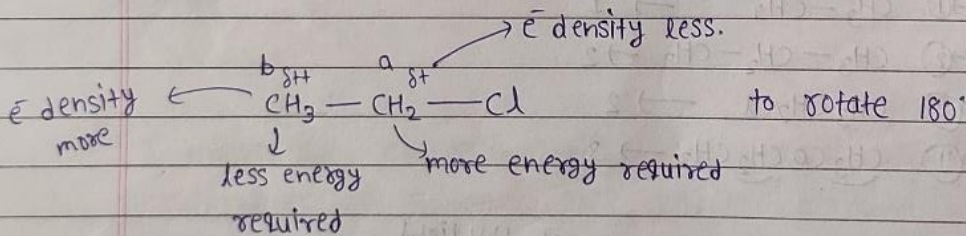


When external magnetic field is applied.

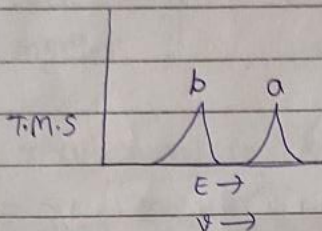
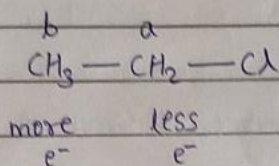


α spin - when external B is applied then spin (state lower energy state) state change along the B field.

→ If the e^- surrounding the H, then less energy is required to rotate 180° .

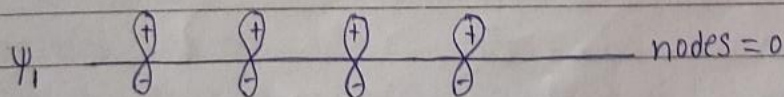
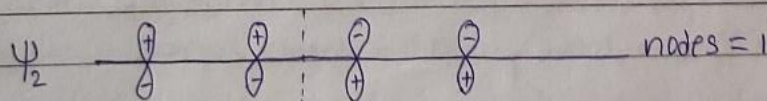
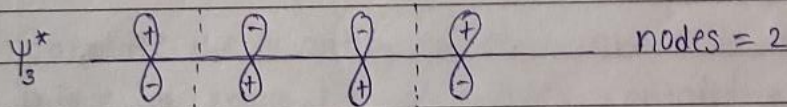
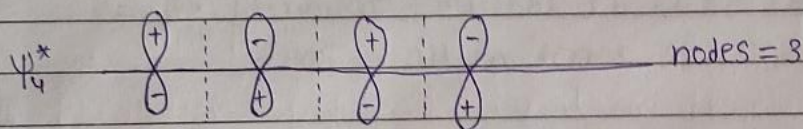


Chemical shift (δ)



$\delta =$ observed chemical shift of hydrogen from T.M.S in Hz.
operating frequency of the instant in Hz.

➤ Diel's Alder reaction.



Spectroscopy → The branch of science concerned with the investigation and measurement of spectra produced when electromagnetic radiation interacts with matter.

Types of spectroscopy

$$v = \frac{c}{\lambda}$$

① Radiowaves : $3 \times 10^6 - 3 \times 10^{10}$ Hz

NMR (Nuclear magnetic resonance spectroscopy).
ESR (Electron spin resonance spectroscopy.)

② microwave : $3 \times 10^{10} - 3 \times 10^{12}$ Hz , To study rotational spectroscopy.

③ Infrared : $3 \times 10^{12} - 3 \times 10^{14}$ Hz , To study vibrational spectroscopy.

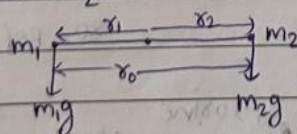
④ U.V-visible : $3 \times 10^{14} - 3 \times 10^{16}$ Hz , To study U-V visible spectroscopy (electronic spectroscopy.)

→ conditions for molecule to be rotationally active :-

- ① dipole moment $\neq 0$
- ② $\Delta J = \pm 1$, J = rotational quantum no.

Diatomic molecule (HCl)

$m_1 = H$ & $m_2 = Cl$



Anticlock wise → +ve
clock wise → -ve

$$\tau_1 = m_1 g \times r_1$$

$$\tau_2 = -m_2 g \times r_2$$

To In Equilibrium. $\tau_1 + \tau_2 = 0$

$$m_1 g r_1 - m_2 g r_2 = 0$$

$$m_1 r_1 = m_2 r_2 \quad \text{--- ①}$$

Torque = Force \times Perpendicular distance
 $\tau = F \times l$

$$x_0 = x_1 + x_2$$

From ① $m_1 x_1 = m_2 (x_0 - x_1)$

$$x_1 (m_1 + m_2) = m_2 x_0$$

$$x_1 = \left(\frac{m_2}{m_1 + m_2} \right) x_0$$

similarly,

$$m_1 (x_0 - x_2) = m_2 x_2$$

$$m_1 x_0 = x_2 (m_1 + m_2)$$

$$x_2 = \left(\frac{m_1}{m_1 + m_2} \right) x_0$$

Total moment of inertia

$$I = m_1 x_1^2 + m_2 x_2^2$$

$$I = \frac{m_1 m_2}{(m_1 + m_2)} x_0^2$$

$$I = \frac{M}{x_0} x_0^2$$

where $M = \text{reduced mass} = \frac{m_1 m_2}{m_1 + m_2}$

Que Derivation of $I = \frac{m_1 m_2}{(m_1 + m_2)} x_0^2$

$$I = m_1 x_1^2 + m_2 x_2^2 \quad (\text{Formula})$$

$$x_1 = \left(\frac{m_2}{m_1 + m_2} \right) x_0 \quad \left| \quad x_2 = \left(\frac{m_1}{m_1 + m_2} \right) x_0 \right.$$

$$I = \frac{m_1 m_2^2 x_0^2}{(m_1 + m_2)^2} + \frac{m_2 m_1^2 x_0^2}{(m_1 + m_2)^2}$$

$$I = \frac{m_1 m_2 x_0^2 (m_2 + m_1)}{(m_1 + m_2)^2}$$

$$I = \frac{m_1 m_2}{(m_1 + m_2)} x_0^2$$

Proved.

Angular momentum (L) = Iω

$$L = \frac{\sqrt{J(J+1)} h}{2\pi} \quad J = \text{Rotational quantum no.}$$

$$E_{\text{rot}} = \frac{1}{2} I \omega^2 = \frac{1}{2} \frac{I \omega^2 I}{I} = \frac{1}{2I} (I\omega)^2 = \frac{1}{2I} L^2$$

$$E_{\text{rot}} = \frac{1}{2I} \frac{J(J+1) h^2}{4\pi^2}$$

$$E_{\text{rot}} = \frac{h^2}{8\pi^2 I} J(J+1)$$

Que calculate the reduced mass of CN molecule given atomic weight C = 12.011 and N = 14.0067

$$\text{Reduced mass (kg)} = \frac{m_1 m_2}{m_1 + m_2} \times \frac{1}{N_A}$$

$$= \frac{12.011 \times 14.0067}{12.011 + 14.0067} \times \frac{1}{6.022 \times 10^{23}}$$

140067
x 12011

140067
280134

1695277

$$= \frac{43560837}{26.0177} \times \frac{1}{6.022 \times 10^{23}}$$

$$= \frac{168.234474}{6.022 \times 10^{23}}$$

$$= 1.07375535 \times 10^{-23}$$

$$= 1.07 \times 10^{-26}$$

$$E = \frac{h^2}{8\pi^2 I} J(J+1)$$

$$\frac{E}{hc} = \frac{h^2}{8\pi^2 I hc} J(J+1) \text{ cm}^{-1}$$

$$\bar{\nu} = \nu_J = \frac{h}{8\pi^2 I c} J(J+1) \text{ cm}^{-1}$$

wave no. $\Rightarrow E_J = B J(J+1) \text{ cm}^{-1}$, $B = \frac{h}{8\pi^2 I c} = \text{Rotational constant}$

$$E = h\nu = h.c \cdot \bar{\nu}$$

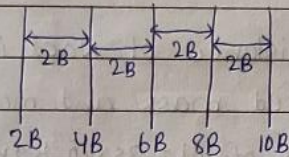
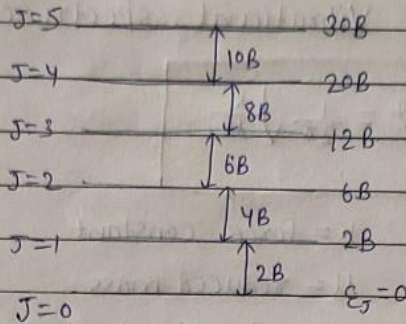
$$\frac{E}{hc} = \frac{h.c}{hc} \bar{\nu} = \bar{\nu}$$

$$B = \frac{h^2}{8\pi^2 I C}$$



Date _____
Page _____

$$E_J = B J(J+1)$$

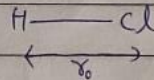


Que microwave spectrum of gaseous HCl molecule exhibits a series of equally spaced lines with interspersing of 20.7 cm^{-1} calculate the intermolecular distance of HCl molecule.

$$2B = 20.7 \text{ cm}^{-1}$$

$$B = 10.35 \text{ cm}^{-1}$$

$$r_0 = ?$$



$$\text{cm}^{-1} \leftarrow B = \frac{h}{8\pi^2 I C} \quad (\text{cm}^{-1} \text{ s}^{-1})$$

$$10.35 = \frac{1}{8\pi^2 I \times 3 \times 10^8} \Rightarrow I = \frac{1}{24 \times 1035 \times 10^6}$$

$$I = \frac{\mu \cdot r_0^2}{r_0^2}$$

$$\mu = \frac{m_1 m_2}{m_1 + m_2} = \frac{1 \times 35.5}{1 + 35.5} = \frac{35.5}{36.5} \times \frac{1}{N_A} \text{ gm}$$

$$\frac{1}{24 \times 1035 \times 10^6} = \frac{35.5}{36.5 N_A} r_0^2$$

$$r_0^2 = \frac{36.5 N_A}{35.5 \times 24 \times 1035 \times 10^6}$$

Vibrational spectroscopy

$$\nu = \frac{1}{2\pi} \sqrt{\frac{k}{\mu}}$$

k = force constant

μ = reduced mass

ν = vibrational frequency.

Q^(a) Sue The intermolecular distance of NaCl is 2.36×10^{-10} m. calculate the reduced mass and moment of inertia of NaCl (atomic mass of Cl = 35×10^{-3} kg mol⁻¹ and Na = 23×10^{-3} kg mol⁻¹)

$$r_0 = 2.36 \times 10^{-10} \text{ m}$$

$$\mu = ?$$

$$I = ?$$

$$\text{Reduced mass } (\mu) = \frac{m_1 m_2}{m_1 + m_2} \times \frac{1}{N_A}$$

$$= \frac{35 \times 10^{-3} \times 23 \times 10^{-3}}{58 \times 10^{-3}} \times \frac{1}{6.022 \times 10^{23}}$$

$$= \frac{805}{58 \times 6.022} \times 10^{-26}$$

$$= \frac{805}{349.276} \times 10^{-26}$$

$$= 2.3 \times 10^{-26} \text{ kg}$$

$$I = \mu r_0^2$$

$$I = 2.3 \times 10^{-26} \times (2.36)^2 \times 10^{-10} \times 10^{-10}$$

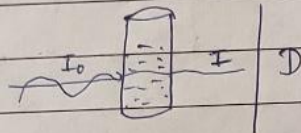
$$I = 12.81 \times 10^{-46}$$

$$I = 1.28 \times 10^{-45}$$

U.V-visible spectroscopy

200 - 400 - 800 nm
 U.V visible

Beer & Lambert's Law



Absorbance A

$$A \propto l$$

$$A \propto c$$

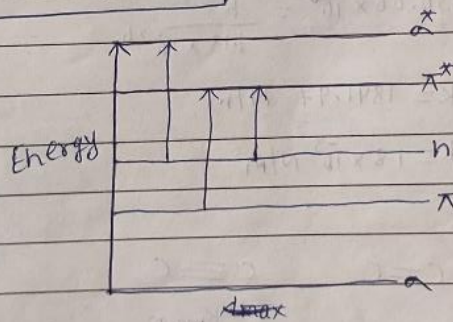
$$A = \epsilon c l$$

$$A = \log \frac{I_0}{I}$$

ϵ - molar absorptivity
 molar extinction coefficient

$$A = \log \frac{I_0}{I}$$

$$n-\pi^* < \pi-\pi^* < n-\sigma^* < \sigma-\sigma^*$$



→ wave length increase (\uparrow): Bathochromic shift (Red)
~~Hypsochromic shift (\downarrow)~~

→ wave length (\downarrow): Hypsochromic shift (Blue)

$$\Delta \lambda \text{ conjugation} \propto \frac{1}{E}$$



Frequency $\nu = \frac{1}{2\pi} \sqrt{\frac{k}{\mu}}$ $k = \text{Force constant}$
 $\mu = \text{Reduced mass}$

$$\mu = \frac{m_1 m_2}{m_1 + m_2}$$

$m_1 = \text{mass of 1st atom.}$

$m_2 = \text{mass of 2nd atom.}$

$$k = \frac{1}{2} I \omega^2 = \frac{1}{2} \frac{\omega^2 I^2}{I} = \frac{1}{2} \frac{(I\omega)^2}{I}$$

$$k = \frac{1}{2} \frac{L^2}{I} \quad \{L = I\omega\}$$

$$L = \sqrt{j(j+1)} \frac{h}{2\pi} \quad j = \text{Rotational Quantum no.}$$

$$k = \frac{h^2}{8\pi^2 I} j(j+1) \text{ joule.}$$

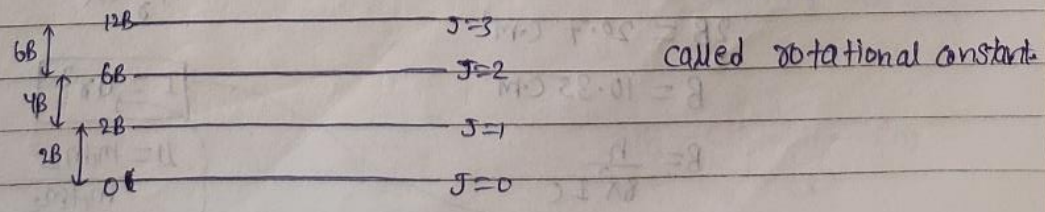
$$I = \mu r^2 \quad \mu = \frac{m_1 m_2}{m_1 + m_2}$$

$$E = \frac{h^2}{8\pi^2 I} j(j+1)$$

$$\bar{\nu} = \frac{E}{hc} = \frac{h}{8\pi^2 I c} j(j+1) \text{ m}^{-1} \text{ or cm}^{-1}$$

$$E_j = \frac{h^2}{8\pi^2 I c} j(j+1) \text{ cm}^{-1}$$

$$E_j = B j(j+1) \text{ cm}^{-1} \quad \text{where } B = \frac{h^2}{8\pi^2 I c} \text{ and is}$$



Quc $^1\text{H}^{35}\text{Cl}$ has a force constant value 480 Nm^{-1} . Calculate the fundamental frequency its wave number.



$$\nu = \frac{1}{2\pi} \sqrt{\frac{k}{\mu}}$$

$$\mu = \frac{m_1 m_2}{m_1 + m_2} = \frac{1 \times 35}{1 + 35} = \frac{35}{36} \times \frac{1}{6.022 \times 10^{23}} \times \frac{1}{10^3} \text{ kg}$$

$$= 0.16 \times 10^{-26} \text{ kg}$$

$$\nu = \frac{1}{2\pi} \sqrt{\frac{480 \times 10}{0.16 \times 10^{-26}}}$$

$$\nu = \frac{c}{\lambda}$$

$$\nu = \frac{1}{2\pi} \sqrt{3 \times 10^{29}}$$

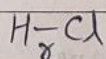
$$\bar{\nu} = \frac{1}{\lambda} = \frac{\nu}{c}$$

$$\nu = 8.7 \times 10^{13}$$

$$\bar{\nu} = \frac{8.7 \times 10^{13}}{3 \times 10^8}$$

$$\bar{\nu} = 2.9 \times 10^5$$

Quc microwave spectrum of gaseous HCl molecule exhibits a series of equally spaced lines, separate by a distance 20.7 cm^{-1} . Calculate the intermolecular distance.



$$2B = 20.7 \text{ cm}^{-1}$$

$$B = 10.35 \text{ cm}^{-1}$$

$$B = \frac{h}{8\pi^2 I c}$$

$$10.35 = \frac{h}{8\pi^2 I c} \Rightarrow 3 \times 10^{10} \text{ cm}^{-1} \text{S}$$

$$I = \mu r^2$$

$$\mu = \frac{m_1 m_2}{m_1 + m_2} = \frac{35.5 \times 1}{36.5 \times 6.022 \times 10^{23} \times 10^3}$$

$$\mu = 1.66 \times 10^{-27} \text{ kg}$$